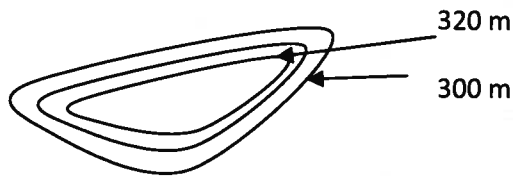







Guided Reading Chapter 3 Sections 2 & 3

1. What is the difference between *relief* and *elevation*?
2. Sea level is the \_\_\_\_\_ between high and low tides.
3. A \_\_\_\_\_ map shows elevation of the land.  
a) city      b) bathymetric      c) topographic
4. Contour lines reveal areas with the \_\_\_\_\_ elevation.
5. What is the contour interval?



6. Complete the table showing the various symbols on a map.

Topographic contour	River	
Campground 	Lake	
Railroad track	Highway	
School 	Woodland	
Many buildings	Orchard	

7. When contour lines are close together on a map, they reveal a (*gentle, steep*) sloping of the land.
8. What do bathymetric maps show?
9. \_\_\_\_\_ blue on a bathymetric map show areas that are shallow.
10. Echo sounding is technology that is used to determine ocean  
a) depth      b) current      c) salinity